


## Five questions. Five minutes. No notes.

 **Class promises in play.** Eyes on your own paper. Pen in hand. No talking.

**When you sit down:** Open your Retrieval Book. Write the date. Answer all five questions in writing. No talking.

1. What do the letters T.O.D.A.L.S. help us remember?
2. What does the A in T.O.D.A.L.S. stand for?
3. Name the four cardinal points.
4. What is the name for a person who makes maps?
5. Name two of the six types of maps.



## Mark your own work. Tick. Cross. Score / 5.

**How to mark:** Tick if right. Cross if wrong, then write the correct answer next to it. Score yourself out of 5 at the bottom of the page.

- 1. The six parts of every map.** Title, Orientation, Date, Author, Legend, Scale.
- 2. Author.** The person or group who made the map.
- 3. North, South, East, West.** The four main directions on a compass rose.
- 4. Cartographer.** A cartographer makes maps. The work is called cartography.
- 5. Open answer.** Any two of: political, physical, road, satellite, topographic, data.



# Today: The continents and oceans of the world

Here is what we will do today, in order. Each task has its own slide with full instructions.

#	Task	Where	Time
1	Retrieval Starter (you are here)	Retrieval Book	5 min
2	Meet the six continents	Booklet S1 (Skills)	12 min
3	The five oceans + where Qatar is	Booklet S1 (Skills)	10 min
4	Label your world map (continents + oceans)	Atlas + world map	20 min
5	Exit ticket + homework	Notebook	8 min


# Task 2: Meet the six continents

 **Where:** Phase Booklet S1 (Skills section) + atlas

In our class we count **six continents** (America = North + South together).

<b>Africa</b> South of Europe.	<b>America</b> North + South together.	<b>Antarctica</b> The icy one, at the bottom.
<b>Asia</b> The biggest. Qatar is here!	<b>Europe</b> North of Africa.	<b>Oceania</b> Australia + Pacific islands.

This task practises: **Crit A.i (vocabulary in context)** • ATL: **Communication**

 **You've done this if:** You can name all six continents and one fact about each.

## Task 3: The five oceans and where Qatar is



 **Where:** Phase Booklet S1 (Skills) + atlas

 **Do this:**

1. Find the five oceans in your atlas. They are the big blue areas.
2. Say each ocean out loud with your partner: Pacific, Atlantic, Indian, Southern, Arctic.
3. Find Qatar. It sits on the Arabian Gulf, which is part of the Indian Ocean.
4. Qatar is a peninsula: land with water on three sides.

### The five oceans

Pacific (the biggest), Atlantic, Indian (it touches our Arabian Gulf), Southern (around Antarctica), and Arctic (the smallest, at the top). **Five oceans** in total. Learn them by heart.

 **Geo says:** Some books say SEVEN continents (they split America into North and South). Both lists are right. In our class, we count America as ONE, so SIX in total. 

*This task practises:* **Crit A.i (vocabulary in context)** • *ATL:* **Communication**

 **You've done this if:** You can name the five oceans and say that Qatar is a peninsula on the Arabian Gulf.

## Task 4: Label your world map



 **Where:** Blank world map + atlas

 **Do this:**


1. Take a blank world map and an atlas. Work with your partner.
2. Label the six continents: Africa, America, Antarctica, Asia, Europe, Oceania.
3. Label the five oceans in the blue areas.
4. Mark Qatar with a dot. It is in Asia, on the Arabian Peninsula.

### Why we are doing this

Next lesson, the **Week 3 formative** asks you to label continents and oceans on your own. Today you practise with a partner and an atlas.

 **Geo says:** Use the atlas only when you are stuck. Try from memory first. Hint: Antarctica is the white one at the bottom. 

*This task practises:* **Crit A.i (vocabulary in context)** • *ATL:* **Communication**

 **You've done this if:** Your world map has all six continents, the five oceans, and Qatar marked.



# Task 5: Exit ticket + homework


 **Where:** Notebook



 **Do this:**

1. Open your notebook. Write today's date at the top of a new page.
2. Write the six continents from memory. Do not look.
3. Then check your world map. Tick the ones you got right.

## Homework before L6

Label all six continents from memory on the blank map in your notebook. Use your atlas only if you really need it. Bring it to L6.

 **Looking ahead:** Next lesson: latitude and longitude, plus your first weekly quiz on the last two weeks.

 **Geo says:** A trick: Antarctica is the icy one at the bottom; Asia is the biggest, and Qatar is in it. 

*This task practises:* **Crit A.i (vocabulary in context)** • *ATL:* **Self-Management**

 **You've done this if:** Your notebook has the date and the six continents, with ticks.



# Ten questions. The last two weeks. No notes.



**Low-stakes quiz.** Your score is just for you and me. No notes. No talking.

**When you sit down:** Open your quiz sheet. Write the date. Answer all ten. No talking.

1. What is a map? (one sentence)
2. Name three of the six types of maps.
3. What does **cartographer** mean?
4. Name any four of the T.O.D.A.L.S. parts.
5. What does the O in T.O.D.A.L.S. stand for?
6. What does a compass rose show?
7. Name the four cardinal points.
8. What does the Legend (or Key) tell you?
9. What does Scale tell you about a map?
10. True or false: two maps of the same place can look different.



## Mark your own work. Score / 10.

**How to mark:** Tick if right. Cross if wrong, then write the correct answer. Score out of 10.

1. A map is a picture of a place; it shows where things are.
2. Any three of: political, physical, road, satellite, topographic, data.
3. A person who makes maps.
4. Title, Orientation, Date, Author, Legend, Scale (any four).
5. **Orientation** (which way is north).
6. The directions: north, south, east, west.
7. North, South, East, West.
8. What the symbols on the map mean.
9. How zoomed in the map is.
10. **True.** Because of perspective and scale.




# Today: Latitude, longitude, and the Week 3 formative

Here is what we will do today, in order. Each task has its own slide with full instructions.

#	Task	Where	Time
1	Weekly Quiz (you are here)	Quiz sheet	10 min
2	Latitude and longitude (find Qatar)	Booklet S1 (Skills)	12 min
3	Label continents + oceans (FORMATIVE)	Blank world map	25 min
4	Exit ticket + Wk 3 wrap	Notebook	8 min

## Task 2: Latitude and longitude

 **Where:** Phase Booklet S1 (Skills) + board

 **Do this:**


1. Latitude lines go ACROSS the map. The middle one is the equator.
2. Longitude lines go UP and DOWN. The middle one is the prime meridian.
3. We use them together to find any place on Earth.
4. Doha is about 25 degrees North, 51 degrees East. You only need to recognise the words.

### Just recognise the words

You do not need to master this at G6. Just know: **latitude goes across, longitude goes up-down**, and together they help us find a place. That is enough for now.

 **Geo says:** A trick: latitude sounds like 'ladder'. Ladder rungs go ACROSS, just like latitude lines. 

*This task practises:* **Crit A.i (vocabulary in context)** • *ATL:* **Communication**

 **You've done this if:** You can point to latitude (across) and longitude (up-down) and say they help us find a place.

# Task 3: Label the continents and oceans

★ **OFFICIAL FORMATIVE** *This is the work I will read this week to see how everyone is doing.*

👉 **Do this:** Do these three things on your blank world map. **Continents:** label all six. **Oceans:** label all five. **Qatar:** mark it with a dot.

✂️ **With frame + worked examples.** *Yours must be DIFFERENT. Do not copy these.*

**Worked example (do not copy):** Africa goes south of Europe. Asia is the biggest, and Qatar is in it.

**Now you try, in your notebook.** Work from memory first. The six continents and five oceans are on the wall and in your booklet.

✏️ **Without frame** *I can do this on my own*

Label the six continents and five oceans, and mark Qatar, on your own.

🚀 **With extension** *I am ready for more*

Label everything. Then write one sentence: which ocean touches Qatar, and how do you know?

*This task practises:* **Crit A.i (vocabulary in context)** • *ATL:* **Communication**

🎯 **You've done this if:** Six continents and five oceans labelled, and Qatar marked, on your world map.

## Task 4: Exit ticket + Wk 3 wrap



 **Where:** Notebook

 **Do this:**

1. Open your notebook. Write today's date.
2. Answer in ONE sentence: which continent or ocean is easiest for you to remember, and why?
3. Revise your booklet this week. Next week we do **scale, then the S1 test**.

 **Wk 3 done!**

**This week you learned:** the six continents, the five oceans, where Qatar is, and what latitude and longitude mean. **Next week (Wk 4):** scale (large vs small), then the S1 Map Skills Test on Thursday.

 **Geo says:** You finished Week 3. You can name six continents and five oceans. The S1 test is close now: revise a little each evening. 

*This task practises:* **Crit D.i (reflection)** • *ATL:* **Self-Management**

 **You've done this if:** Your notebook has the date and a 1-sentence answer.